

55 minutes

# Mathematics Paper 2

## Stage 9

Name .....

Additional materials: Ruler  
Calculator  
Tracing paper  
Geometrical instruments

### READ THESE INSTRUCTIONS FIRST

Answer **all** questions in the spaces provided on the question paper.

You should show all your working on the question paper.

The number of marks is given in brackets [ ] at the end of each question or part question.

The total number of marks for this paper is 45.

For Teacher's Use	
Page	Mark
1	
2	
3	
4	
5	
6	
7	
8	
9	
10	
11	
12	
<b>Total</b>	

1 Look at the numbers.

397.36
--------

76.75
-------

(a) Write each number correct to one significant figure.

..... 400 ..... and ..... 80 ..... [1]

(b) Without working out the correct answer, estimate the value of  $397.36 \div 76.75$  correct to one significant figure.

You must show your working.

$$400 \div 80 = 5$$

..... 5 ..... [1]

2 Work out the values of  $x$ ,  $y$  and  $z$  in these statements.

(a)  $4^6 \times 4^x = 4^9$

$$6 + x = 9$$

$$x = 9 - 6$$

$x =$  ..... 3 ..... [1]

(b)  $7^4 \div 7^6 = 7^y$

$$y = 4 - 6$$

$y =$  ..... -2 ..... [1]

(c)  $5^z = 1$

$z =$  ..... 0 ..... [1]

3 Write a fraction in the box to make this calculation correct.

$$2\frac{3}{4} \times \boxed{1\frac{1}{2}} = 4\frac{1}{8}$$

$$\frac{11}{4} \times x = \frac{33}{8}$$

$$x = \frac{33}{8} \times \frac{4}{11} = \frac{3}{2}$$

- 4 Samira buys a car.  
The car loses 23% of its value in the first year. (22)  
At the end of the first year her car is worth \$6575.80

How much did Samira pay for her car?

Show your working.

$$22 - 23\% = 6575.8$$

$$77\% = 6575.8$$

$$22 = 8540$$

$$\text{\$ } \underline{8540} \quad [2]$$

- 5 The exchange rate between the British pound (£) and the US dollar (\$) is

$\text{\pounds}1 = \text{\$}1.60$
-----------------------------------

- (a) Convert £75 into dollars.

$$75 \times 1.6$$

$$\text{\$ } \underline{120} \quad [1]$$

- (b) Convert \$75 into pounds.

$$75 \div 1.6$$

$$\text{\pounds } \underline{46.875} \quad [1]$$

- 6 Look at this calculation.

$$\begin{array}{r} 26.3 + 47.9 \\ \hline 107.4 - 3.29 \end{array}$$

- (a) Use your calculator to work out the answer.  
Write down all of the figures on your display.

$$\frac{74.2}{104.11} = 0.712707713$$

$$\text{.....} \quad [1]$$

- (b) Write your answer correct to 3 decimal places.

$$\text{.....} \quad [1]$$

- 7 Tariq says that  $\frac{1}{3}$  is the same as 33%.

Is Tariq correct?

Explain your answer.

Yes/No because  $\frac{1}{3} \rightarrow \frac{1}{3} \times 100 \% = 33.33333\%$   
 Not the same just round off / approximation [1]

- 8 Complete the boxes to make the calculation correct.

$$\frac{3x}{8} + \frac{\boxed{2x}}{4} = \frac{5x}{\boxed{8}}$$

[2]

- 9 Look at the equation.

$$3x - 2y - 5 = 17$$

Work out the values of

(a)  $3x - 2y + 9$   $\rightarrow 3x - 2y - 5 = 17$  (both sides added to 14)  
 $3x - 2y - 5 + 14 = 17 + 14$   
 $3x - 2y + 9 = 31$  [1]

(b)  $9x - 6y$

$$3(3x - 2y - 5) = 3 \times 17$$


$$9x - 6y - 15 = 51$$


$$9x - 6y = 51 + 15$$

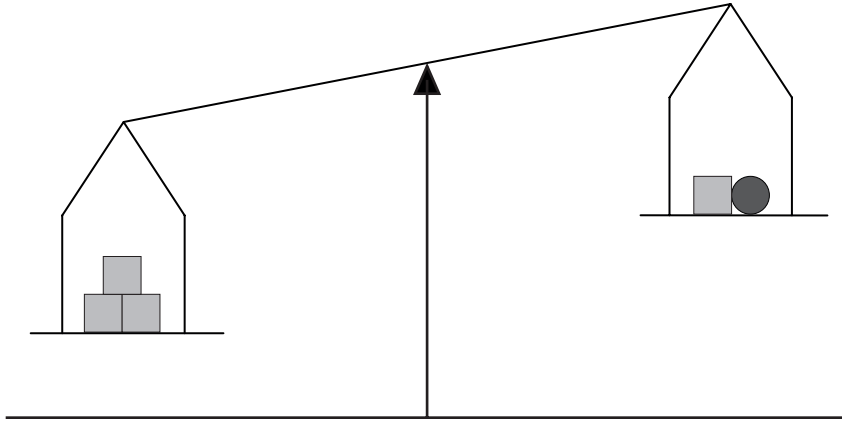
$$= 66$$

[1]

10 Here is a balance.

Each  has a mass of  $m$  kg.

The  has a mass of 4 kg.



(a) Complete the inequality.

$$3m > m + 4$$

[1]

(b) Solve the inequality and show the solution on the number line.

$$3m - m > 4 \quad m > 2$$

$$2m > 4$$



[2]

11 Factorise.

$$4a^2 - 6ab$$

$$2a(2a - 3b)$$

..... [1]

For  
Teacher's  
Use

- 12 The  $n^{\text{th}}$  term of a sequence is  $3n + x$ .  
The fourth term is 17

(a) Work out the value of  $x$ .

$$17 = 3(4) + x$$

$$17 = 12 + x$$

$$x = 5$$

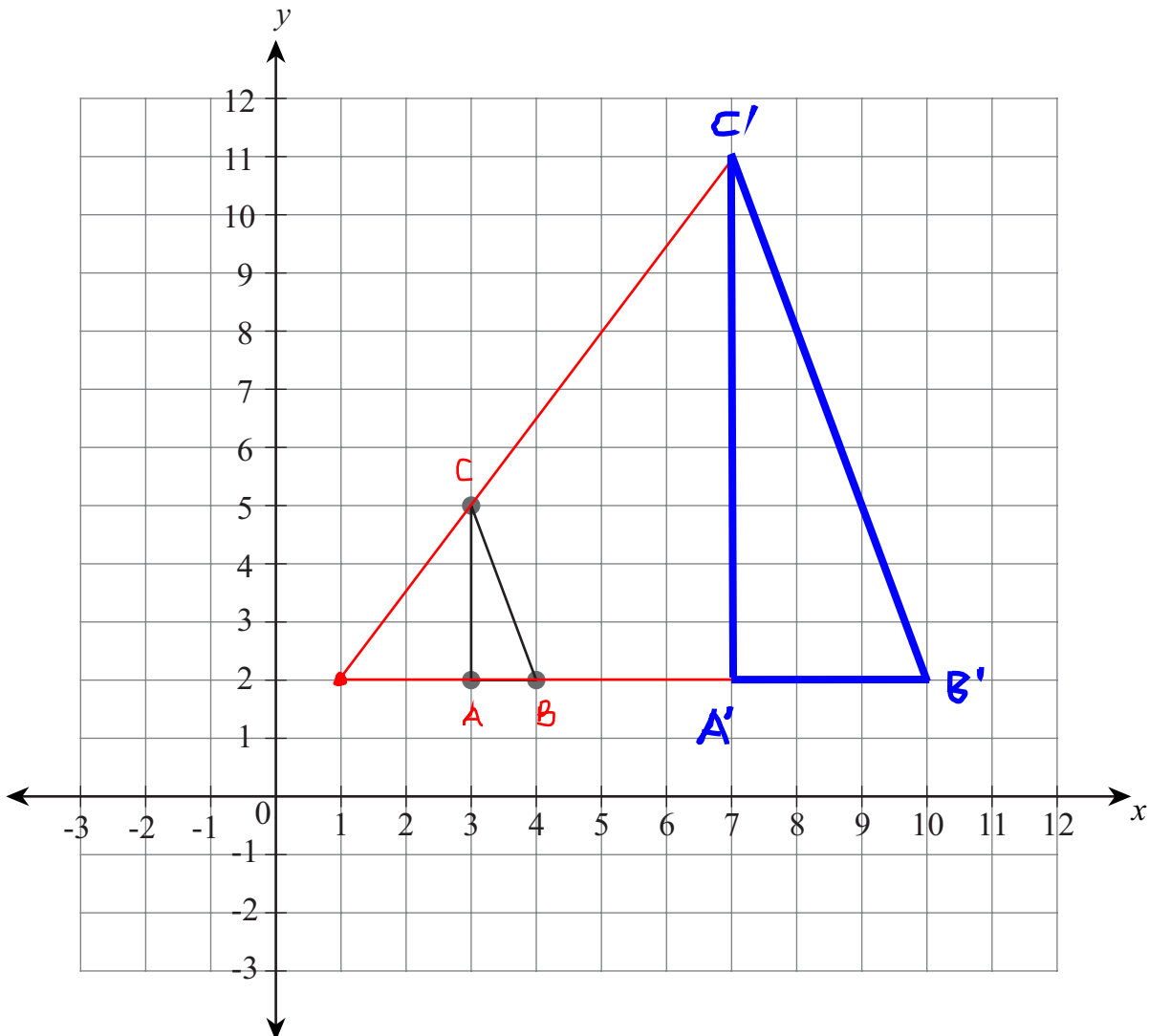
$$x = \underline{\quad 5 \quad} \quad [1]$$

(b) What is the first term of the sequence?

$$n = 1 \rightarrow 3(1) + 5 = 8$$

$$\underline{\quad 8 \quad} \quad [1]$$

- 13 A triangle is drawn on the grid.

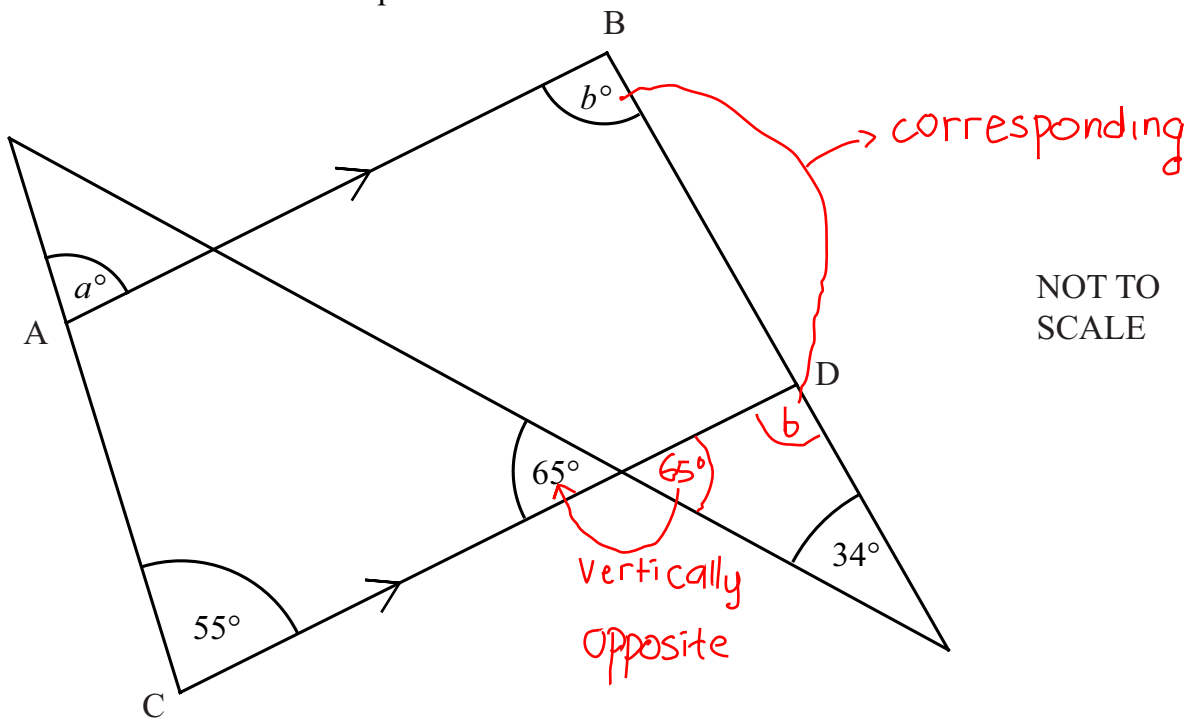


Enlarge the triangle with scale factor 3 and centre of enlargement (1, 2).

[2]

- 14 Look at the diagram.  
The lines AB and CD are parallel.

For  
Teacher's  
Use



- (a) (i) Write down the value of  $a$ .  $a = \underline{\hspace{2cm} 55^\circ \hspace{2cm}}$  [1]
- (ii) Give a reason for your answer.  $\underline{\hspace{2cm} \text{corresponding with } 55^\circ \hspace{2cm}}$  [1]
- (b) Work out the value of  $b$ .

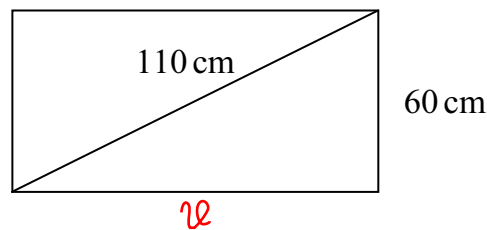
$$b + 65 + 34 = 180$$

$$b + 99 = 180$$

$$\begin{aligned} b &= 180 - 99 \\ &= 81 \end{aligned}$$

$$b = \underline{\hspace{2cm} 81 \hspace{2cm}}$$
 [1]

- 15 The diagonal of a rectangle is 110 cm.



NOT TO  
SCALE

The rectangle is 60 cm high.

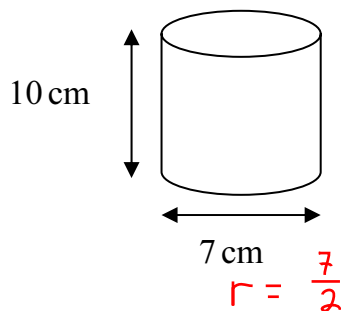
How wide is the rectangle?

Give your answer to the nearest cm.

$$\begin{aligned} w^2 + 60^2 &= 110^2 \\ w^2 &= 12100 - 3600 \\ &= 8500 \\ w &= \sqrt{8500} \end{aligned}$$

.....92..... cm [2]

- 16 A tin of beans is a cylinder.  
It has a base with a diameter of 7 cm and a height of 10 cm.



NOT TO  
SCALE


- (a) Work out the **volume** of the tin.  
Give your answer to the nearest  $\text{cm}^3$ .

$$\begin{aligned} V &= \pi r^2 h \\ &= \frac{22}{7} \times \frac{7}{2} \times \frac{7}{2} \times 10 \\ &= 385 \end{aligned}$$

.....385.....  $\text{cm}^3$  [2]



- (b) The label on the tin covers all of the curved surface.  
It has no overlap.  
When removed from the tin the label is a rectangle.



NOT TO  
SCALE

length of the rectangle = circumference of the base

Work out the **area** of the label.  
Give your answer to the nearest  $\text{cm}^2$ .

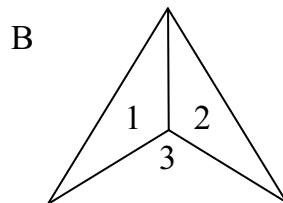
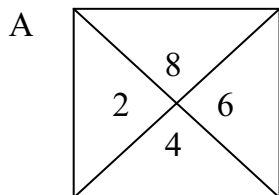
$$l = 2\pi r = 2 \times \frac{22}{7} \times \frac{7}{2} = 22 \text{ cm}$$

$$A = l \times w = 22 \times 10 \\ = 220$$

.....  $220$   $\text{cm}^2$  [2]

17 A and B are fair spinners.

The diagrams show their faces.



For  
Teacher's  
Use

(a) Complete the sample space diagram to show all the possible outcomes of spinning the triangular and the square spinner.

Spinner B

		1	2	3
Spinner A	2	(2, 1) $\circ$	(2, 2) $E$	(2, 3) $\circ$
	4	(4, 1) $\circ$	(4, 2) $E$	(4, 3) $\circ$
	6	(6, 1) $\circ$	(6, 2) $E$	(6, 3) $\circ$
	8	(8, 1) $\circ$	(8, 2) $E$	(8, 3) $\circ$

$\circ$  = Odd total  
(add up = odd number)

$E$  = Even

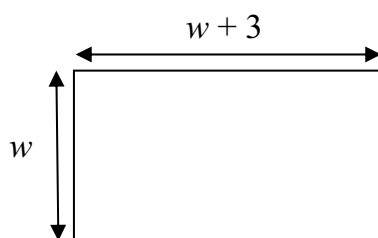
[1]

(b) What is the probability of scoring an **odd total** when the numbers on the two spinners are added?

$$\frac{8}{12} = \frac{2}{3}$$

$\frac{2}{3}$   
..... [1]

- 18 The length of a rectangle is 3 cm longer than its width ( $w$ ).



The area of the rectangle is  $30 \text{ cm}^2$ .

Work out the width of the rectangle.  
Give your answer correct to 1 decimal place.

$$w(w+3) = 30$$

$$w^2 + 3w = 30$$

$$w^2 + 3w - 30 = 0 \rightarrow \text{Can't factorize!}$$

Use abc formula!

$$w = \frac{-b \pm \sqrt{b^2 - 4ac}}{2a}$$

$$= \frac{-3 \pm \sqrt{9 + 120}}{2}$$

$$w = \frac{-3 \pm \sqrt{129}}{2}$$

$$w = 4.2 \text{ cm} \quad [3]$$

OR use trial & error

$w$	$w+3$	$w(w+3)$
4	7	28
3	6	18
5	8	40
4.1	7.1	29.11
4.2	7.2	30.24

- 19 Michel is carrying out a survey to find out how much time students spend watching TV.  
He designs a questionnaire.  
This is one of the questions.

How many hours do you spend watching TV per week?  
Please tick.

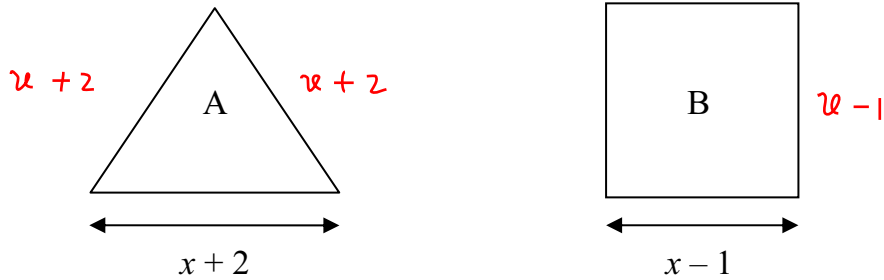
<input type="checkbox"/>	<input type="checkbox"/>	<input type="checkbox"/>	<input type="checkbox"/>
1 to 5	5 to 10	10 to 20	More than 20

Make **two** criticisms of Michel's question.

- Better if per day, more specific
- The question is too direct. If he wants to

give some questions to identify time consuming for watching TV, the question should not too direct

- 20 Shape A is an equilateral triangle.  
Shape B is a square.



The perimeters of A and B are equal.

Work out the lengths of the sides of shapes A and B.  
You must show your working

$$P_A = x + 2 + x + 2 + x + 2 = 3x + 6$$

$$P_B = (x - 1) \times 4 = 4x - 4$$

$$P_A = P_B$$

$$3x + 6 = 4x - 4$$

$$6 + 4 = 4x - x$$

$$10 = x$$

Length of sides of A  $x + 2 = 12$  cm

Length of sides of B  $x - 1 = 9$  cm [3]